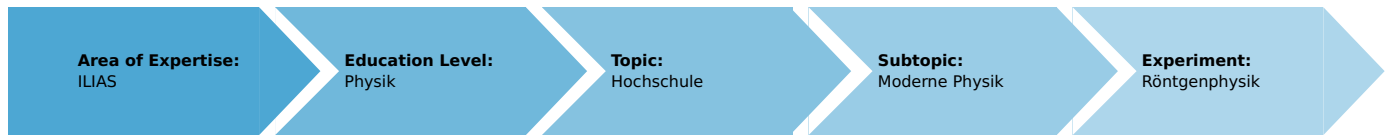


Splitting of the characteristics $K\alpha$ doublet radiation of iron (Item No.: P2540801)

Curricular Relevance



Difficulty



Difficult

Preparation Time



1 Hour

Execution Time



2 Hours

Recommended Group Size



2 Students

Additional Requirements:

- PC

Experiment Variations:

Keywords:

Characteristic X-radiation, energy levels, selection rules for X-radiation, energy term symbols, Bragg's law

Overview

Short description

Principle

The X-radiation that is generated by an X-ray tube with an iron anode is selected as a function of the Bragg angle with the aid of a monocrystal. A Geiger-Müller counter tube registers the intensity of the radiation. The separation of the lines of the $K\alpha$ doublet as well as their respective intensities are determined.

This experiment is included in the "XRC 4.0 X-ray characteristics" upgrade set.



Fig. 1: P2540801

Equipment

Position No.	Material	Order No.	Quantity
1	XR 4.0 expert unit, X-ray unit, 35 kV	09057-99	1
2	XR 4.0 X-ray goniometer	09057-10	1
3	XR 4.0 X-ray Plug-in Fe tube	09057-71	1
4	Geiger-Mueller counter tube, 15 mm (type B)	09005-00	1
5	XR 4.0 X-ray LiF crystal, mounted	09056-05	1
6	XR 4.0 Software measure X-ray	14414-61	1
7	Data cable USB, plug type A/B, 1.8 m	14608-00	1
8	XR 4.0 X-ray Diaphragm tube d = 2 mm	09057-02	1

Tasks

1. Analyse the intensity of the iron X-radiation as a function of the Bragg angle and with the aid of a **LiF** monocrystal.
2. Determine the wavelengths and intensities of the $K_{\alpha 1}$ and $K_{\alpha 2}$ lines and compare your values to the theoretical values.

Set-up and procedure

Set-up

Connect the goniometer and the Geiger-Müller counter tube to their respective sockets in the experiment chamber (see the red markings in Fig. 2). The goniometer block with the analyser crystal should be located at the end position on the right-hand side.

Fasten the Geiger-Müller counter tube with its holder to the back stop of the guide rails. Do not forget to install the diaphragm in front of the counter tube (see Fig. 3).

Insert a diaphragm tube with a diameter of 2 mm into the beam outlet of the tube plug-in unit for the collimation of the X-ray beam.

For calibration: Make sure, that the correct crystal is entered in the goniometer parameters. Then, select "Menu", "Goniometer", "Autocalibration". The device now determines the optimal positions of the crystal and the goniometer to each other and then the positions of the peaks



Fig. 2: Connectors in the experiment chamber

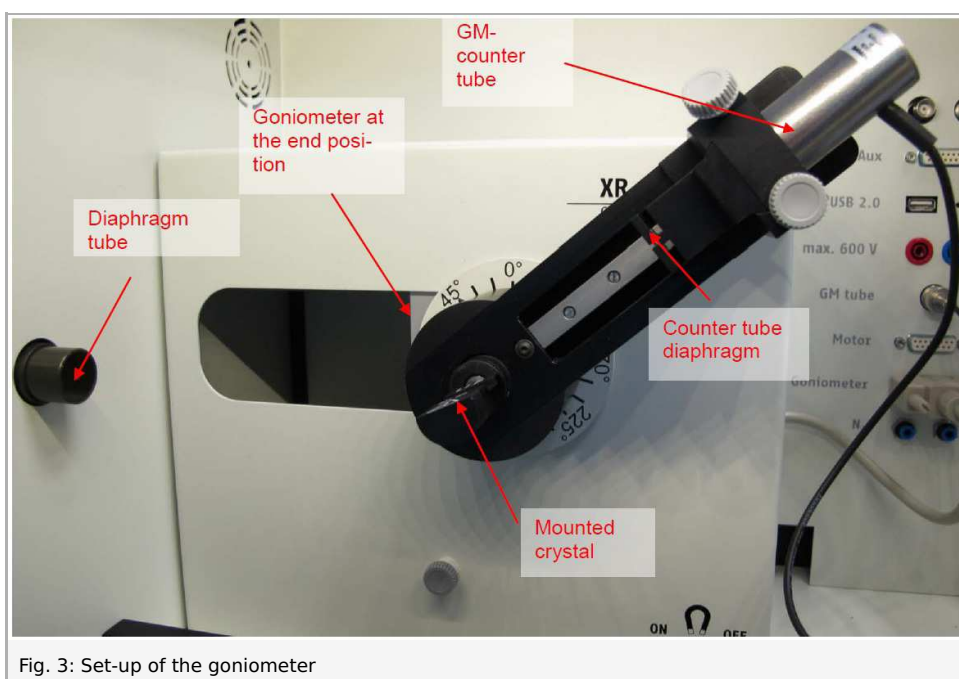


Fig. 3: Set-up of the goniometer

Note

Details concerning the operation of the X-ray unit and goniometer as well as information on how to handle the monocrystals can be found in the respective operating instructions.

Procedure

- Connect the X-ray unit via USB cable to the USB port of your computer (the correct port of the X-ray unit is marked in Fig. 4).

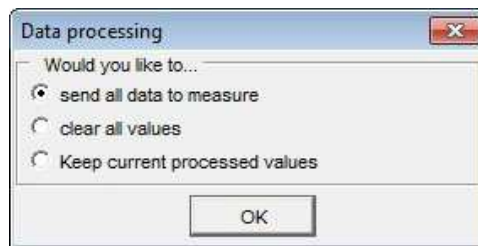


Fig. 4: Connection of the computer

- Start the "measure" program. A virtual X-ray unit will be displayed on the screen (Fig. 5).
- You can control the X-ray unit by clicking the various features on and under the virtual X-ray unit. Alternatively, you can also change the parameters at the real X-ray unit. The program will automatically adopt the settings.
- Click the experiment chamber to change the parameters for the experiment. In the case of the entire spectrum, select the settings as shown in Figure 6. If you measure the section of the $K_{\alpha 1}$ and $K_{\alpha 2}$ lines, select the following scanning range: start angle 70° , stop angle 77° , gate time of 3 s .
- If you click the X-ray tube, you can change the voltage and current of the X-ray tube. Select the parameters as shown in Figure 6.
- Start the measurement by clicking the red circle:



- After the measurement, the following window appears:



- Select the first item and confirm by clicking OK. The measured values will now be transferred directly to the "measure" software.
- At the end of this manual a short introduction to the evaluation of data using the program "measure" is given.

Note

Never expose the Geiger-Müller counter tube to the primary X-radiation for an extended period of time.



Fig. 5: Part of the user interface of the software

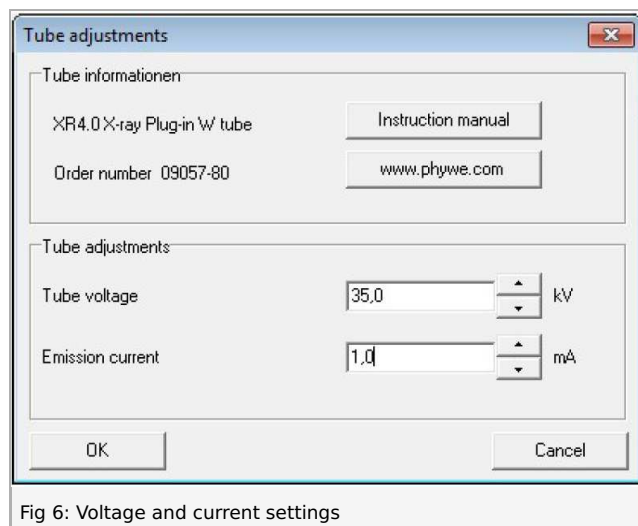


Fig 6: Voltage and current settings

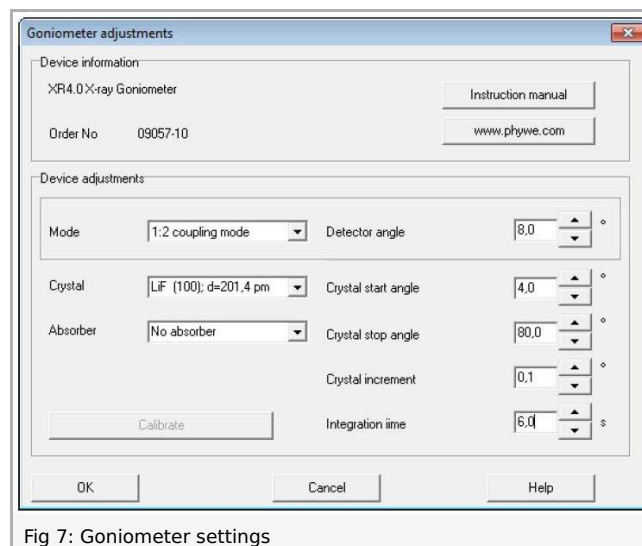


Fig 7: Goniometer settings

Overview of the settings of the goniometer and X-ray unit:

- 2:1 coupling mode
- Angle step width 0.1°
- Anode voltage $U_A = 35 \text{ kV}$; anode current $I_A = 1 \text{ mA}$

Recording of the entire spectrum:

- Gate time 2 s
- Scanning range $4^\circ - 80^\circ$

$K_{\alpha 1}$ and $K_{\alpha 2}$ lines:

- Gate time 3 s
- Scanning range $70^\circ - 77^\circ$

Theory and evaluation

Theory

Figure 8 shows the energy-level-diagram of molybdenum ($Z = 26$).

When an electron is removed from the K shell of an atom, the resulting hole is filled by an electron from a higher shell. The energy difference of the energy levels that are involved in this process can be converted into X-radiation. When an s electron is missing from the K shell, an ${}^2S_{1/2}$ term results. The same applies to the L_1 shell. A missing p electron on the L_2 or L_3 shell results in ${}^2P_{1/2-3/2}$ or ${}^2P_{3/2}$ terms. Since quantum-mechanical selection rules only allow radiative transitions with $\Delta l = \pm 1$, the transition $L_1 \rightarrow K$ is not allowed. Indeed, instead of three K_α lines, only the two lines $K_{\alpha 1}$ and $K_{\alpha 2}$ can be observed. Since the conditions ${}^2P_{3/2}$ and ${}^2P_{1/2}$ are fourfold and twofold degenerate, the intensities of the $K_{\alpha 1}$ and $K_{\alpha 2}$ lines have the ratio 4 : 2.




Fig. 8: Energy-level-diagram of iron

With the aid of Bragg's law (1), the glancing angles ϑ of the characteristic lines can be used to determine their wavelengths:

$$2d \sin \vartheta = n\lambda \quad (1)$$

(d = interplanar spacing (**LiF**) = 201.4 pm; $n = 1, 2, 3, \dots$)

For comparison, the wavelengths can also be calculated from the energy-level-diagram in Figure 8 with the aid of (2):

$$E = h \cdot f = \frac{h \cdot c}{\lambda} \quad (2)$$

Planck's constant $h = 6.6256 \cdot 10^{-34} \text{ J s}$

Velocity of light $c = 2.9979 \cdot 10^8 \text{ m/s}$

Equivalent $1 \text{ eV} = 1.6021 \cdot 10^{-19} \text{ J}$

Note

The data of the energy-level diagram were taken from the "Handbook of Chemistry and Physics", CRC Press Inc., Florida.

Evaluation

In the following section, the evaluation of the data is described based on example results. Your results may differ from the results given below.

Task 1: Analyse the intensity of the iron X-radiation as a function of the Bragg angle and with the aid of a **LiF** monocrystal.

Student's Sheet

Printed: 16.08.2017 09:48:16 | P2540801

Figure 9 shows the X-ray spectrum of iron that was analysed with a **LiF** monocrystal. The splitting of the K_{α} doublet becomes just about visible as of the second-order interference ($n = 2$).

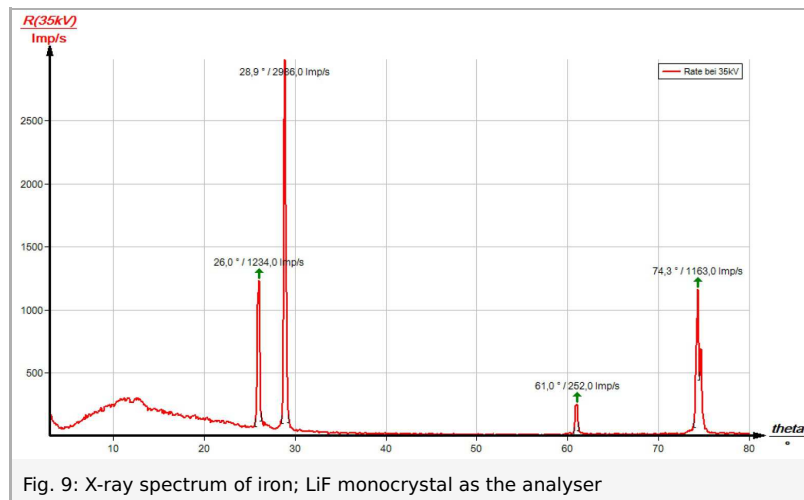


Table 1 shows the values of the glancing angles ϑ that were determined based on Figure 9 as well as the values of the wavelengths λ of the characteristic X-ray line of iron that were calculated with the aid of equation (1). For comparison, table 2 shows the λ values that were calculated with the aid of equation (2) and based on the energy values of Figure 8.

	$\vartheta(K_{\alpha})/^{\circ}$	$\vartheta(K_{\beta})/^{\circ}$	$\lambda(K_{\alpha})/pm$	$\lambda(K_{\beta})/pm$
n = 1	28.9	26.0	194.7	176.6
n = 2	74.3	61.0	193.9	176.15
	Mean value:		193.8	176.48

Table 1: Wavelengths of the K_{λ} and K_{β} lines calculated with the aid of the experimental values

$\lambda(K_{\alpha 1})/pm$	$\lambda(K_{\alpha 2})/pm$	$\lambda(K_{\beta})/pm$
193.6	193.99	175.66

Table 2: Wavelengths of the K_{λ} and K_{β} lines calculated with the aid of the energy values (see Fig. 8)

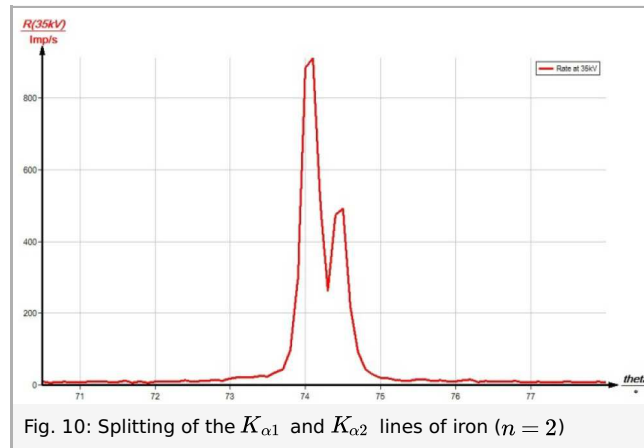
Task 2: Determine the wavelengths and intensities of the $K_{\alpha 1}$ and $K_{\alpha 2}$ lines and compare your values to the theoretical values.

In Figure 10, the line maxima are located at $\vartheta(K_{\alpha 1}) = 74.1^{\circ}$ and $\vartheta(K_{\alpha 2}) = 74.5^{\circ}$. Based on these glancing angle values, equation (1) leads to the following values for the associated wavelengths:

$$\lambda(K_{\alpha 1}) = 193.70 \text{ pm} \text{ and } \lambda(K_{\alpha 2}) = 194.08 \text{ pm}$$



They correspond rather well to the values that were calculated based on the energy values of the energy-level-diagram in Figure 8 (see table 2). The difference of the two wavelengths of $\Delta\lambda = 0.38 \text{ pm}$ that was determined by way of an experiment is also very close to the theoretical value of $\Delta\lambda = 0.37 \text{ pm}$.

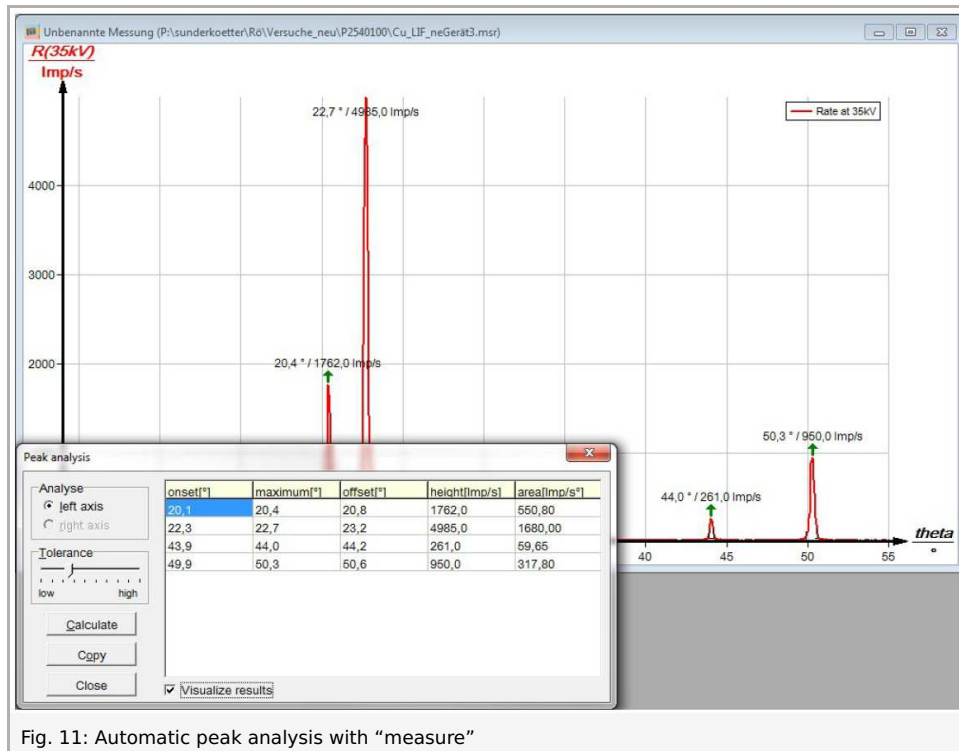
As a first approximation, the intensity of an X-ray line is determined by its maximum. As a result, Figure 10 leads to an intensity ratio of $I(K_{\alpha 1})/I(K_{\alpha 2}) \approx 1.9$.



“measure” software

With the “measure” software, the peaks in the spectrum can be determined rather easily:

- Click the button  and select the area for the peak determination.
- Click the button  “Peak analysis”.
- The window “Peak analysis” appears (see Fig. 11).
- Then, click “Calculate”.
- If not all of the desired peaks (or too many of them) are calculated, readjust the error tolerance accordingly.
- Select “Visualise results” in order to display the peak data directly in the spectrum.



Student's Sheet

Printed: 16.08.2017 09:48:16 | P2540801

Refer to the Help of the “measure” software for additional, more detailed explanations concerning the program features.